

PERIMETER

Missing Sides

COMMON CORE STANDARD MD.D.8

By: Samantha Daughtry

The perimeter of the rectangle below is 34 inches. The length is 8 inches. What is the width?

8 in.



1

The perimeter of the rectangle below is 48 inches. The length is 6 inches. What is the width?

6 in.



2

The perimeter of the rectangle below is 26 inches. The length is 9 inches. What is the width?

9 in.



3

The perimeter of the rectangle below is 22 inches. The length is 7 inches. What is the width?

7 in.



4

The perimeter of the rectangle below is 22 inches. The length is 9 inches. What is the width?

9 in.



5

The perimeter of the rectangle below is 16 inches. The length is 5 inches. What is the width?

5 in.



6

The perimeter of the rectangle below is 30 inches. The length is 9 inches. What is the width?

9 in.



7

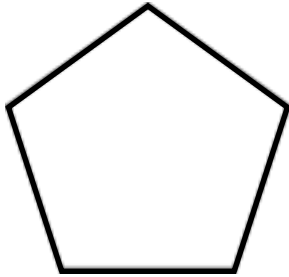
The perimeter of the rectangle below is 28 inches. The length is 8 inches. What is the width?

8 in.



8

The perimeter of the pentagon below is 35 inches. What is the width?



9

The perimeter of the rectangle below is 42 inches. The length is 15 inches. What is the width?

15 in.



10

The perimeter of the rectangle below is 44 inches. The length is 12 inches. What is the width?

12 in.



11


The perimeter of the rectangle below is 24 inches. The length is 7 inches. What is the width?

7 in.



12

The perimeter of the square below is 24 inches. What is the width?



13

The perimeter of the rectangle below is 32 inches. The length is 10 inches. What is the width?

10 in.



14

The perimeter of the rectangle below is 26 inches. The length is 7 inches. What is the width?

6 in.



15

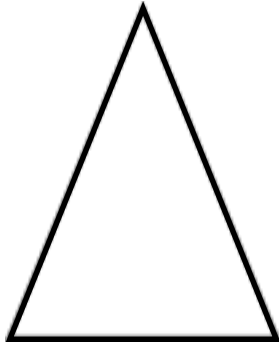
The perimeter of the rectangle below is 24 inches. The length is 9 inches. What is the width?

9 in.



16

The perimeter is of the triangle below is 56 inches. The base is 16 inches.
What is the width?



16 in.

17

The perimeter of the rectangle below is 44 inches. The length is 17 inches.
What is the width?



17 in.

18

The perimeter of the rectangle below is 42 inches. The length is 15 inches.
What is the width?



15 in.

19

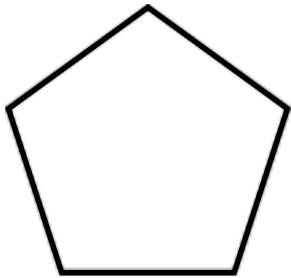
The perimeter of the rectangle below is 20 inches. The length is 8 inches.
What is the width?



8 in.

20

The perimeter of the pentagon below is 50 inches. What is the width?



21

The perimeter of the rectangle below is 14 inches. The length is 4 inches. What is the width?

4 in.



22

The perimeter of the rectangle below is 60 inches. The width is 10 inches. The length is two times the width. What is the width?

10 in.



23

The perimeter of the rectangle below is 54 inches. The width is 9 inches. The length is two times the width. What is the width?

9 in.



24

Name: _____

Missing Sides Perimeter Task Cards

1	2	3	4	5	6
7	8	9	10	11	12
13	14	15	16	17	18
19	20	21	22	23	24

Name: _____

Missing Sides Perimeter Task Cards

1 9	2 18	3 4	4 4	5 2	6 3
7 6	8 6	9 7	10 6	11 10	12 5
13 6	14 6	15 6	16 3	17 20	18 4
19 6	20 2	21 10	22 3	23 20	24 18

THANKS!

Thank you for purchasing! If you are happy with this product, please leave positive feedback. If not, please let me know so I can try and fix it.

